

## How much change will I get?



I buy 2 teddies and 1 toy horse.  
I pay with a £20 note. My change is...

Toy horse



Teddy



I buy 2 sun creams and 1 pair of sunglasses.  
I pay with a £20 note and a £10 note.  
My change is...

Sunglasses



Sun cream



I buy 1 hat and 2 scarves.  
I pay with a £20 note. My change is...



Scarf



Hat

I buy 1 watch and 1 pair of headphones.  
I pay with two £20 notes. My change is...




Watch

Headphones



I buy 1 towel and 1 blanket.  
I pay with a £50 note. My change is...




Blanket



Towel

I buy 1 bag and 2 purses.  
I pay with three £10 notes. My change is...

Purse



Bag



I am very confident.



I am confident.



I would like more practice.

## How much change will I get?



I buy 2 teddies and 1 toy horse.  
I pay with a £20 note. My change is...

£9

Toy horse

$$£4 + £4 + £3 = £11$$

$$£20 - £11 = £9$$

Teddy



I buy 2 sun creams and 1 pair of sunglasses.  
I pay with a £20 note and a £10 note.  
My change is...

£8

$$£7 + £7 + £11 = £25$$

$$£30 - £25 = £5$$

Sunglasses



Sun cream



I buy 1 hat and 2 scarves.  
I pay with a £20 note. My change is...

£0

$$£8 + £6 + £6 = £20$$

No change received.



Scarf



Hat

I buy 1 watch and 1 pair of headphones.  
I pay with two £20 notes. My change is...

£16

$$£15 + £9 = £24$$

$$£40 - £24 = £16$$



Watch




Headphones

I buy 1 towel and 1 blanket.  
I pay with a £50 note. My change is...

£37

$$£4 + £9 = £13$$

$$£50 - £13 = £37$$



Blanket



Towel


I buy 1 bag and 2 purses.  
I pay with three £10 notes. My change is...

£14

$$£12 + £2 + £2 = £16$$

$$£30 - £16 = £14$$

Purse



Bag



I am very confident.



I am confident.



I would like more practice.